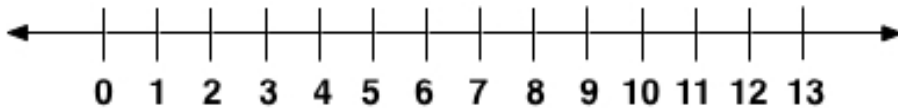
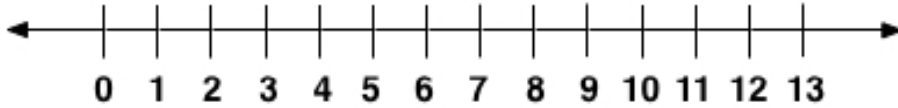


8.4 Dividing Integers

Division Using a Number Line

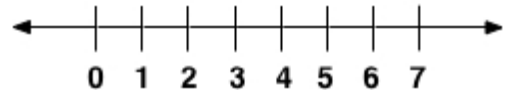
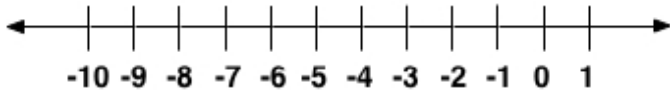
$$12 \div 3 = 4$$



Ex. 1 Determine the quotient using a number line.

a) $(-8) \div 4 =$

b) $(4) \div 4 =$



Ex. 2 Write two division statements that the diagram could represent.

